


B



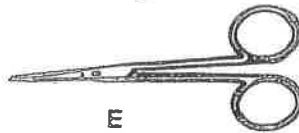
A



C



D



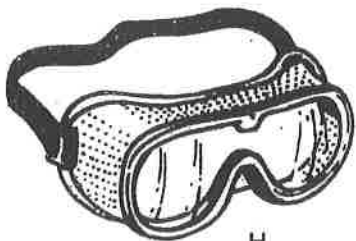
E



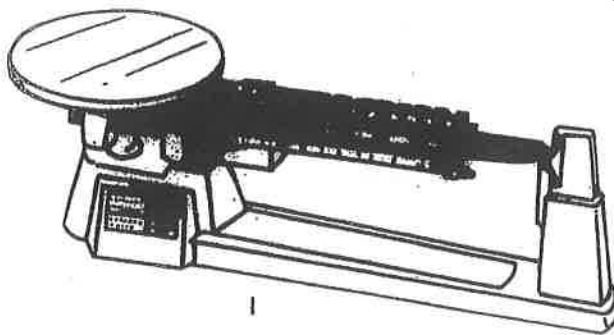
F



G



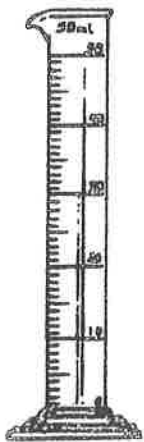
H



I



N



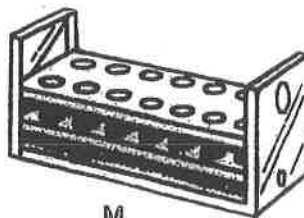
J



K



L



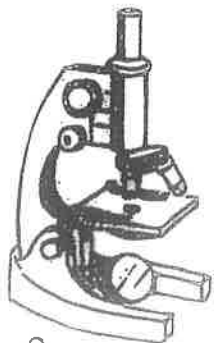
M



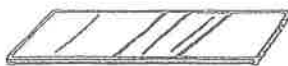
P



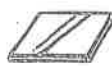
O



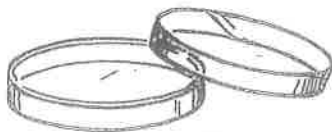
Q



R



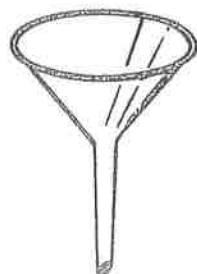
S




T



U



V



W

3. Identify as many of the laboratory equipment shown on the next page letter next to the piece of equipment. When finished see the teacher for the answers.

- | | |
|------------------------------|-------------------------------|
| _____ 1. beaker | _____ 13. glass slide |
| _____ 2. Bunsen burner | _____ 14. Petri Dish |
| _____ 3. coverslip | _____ 15. pipette |
| _____ 4. dissecting pins | _____ 16. probe |
| _____ 5. dissecting scissors | _____ 17. metric ruler |
| _____ 6. dissecting tray | _____ 18. safety goggles |
| _____ 7. medicine dropper | _____ 19. scalpel |
| _____ 8. forceps | _____ 20. test tube |
| _____ 9. funnel | _____ 21. test tube rack |
| _____ 10. graduated cylinder | _____ 22. thermometer |
| _____ 11. hand lens | _____ 23. triple-beam balance |
| _____ 12. microscope | |

4. Next identify the function of certain types of laboratory equipment.

- a. beaker _____
- b. coverslip _____
- c. medicine dropper _____
- d. forceps _____
- e. Graduated cylinder _____
- f. hand lens _____
- g. microscope _____
- h. metric ruler _____
- i. safety goggles _____
- j. test tube _____